


Name: \_\_\_\_\_

Date: \_\_\_\_\_

---

1. How many **edges** does the figure shown below have?



- A. 6
  - B. 8
  - C. 12
  - D. 13
- 

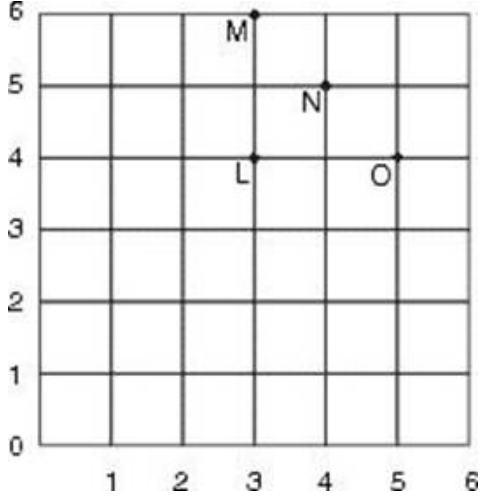
2. If it takes Mari 20 minutes to walk from home to school, what is the latest time she can leave to get to school by 8:10 A.M.?

- A. 7:00 A.M.
  - B. 7:10 A.M.
  - C. 7:50 A.M.
  - D. 8:00 A.M.
- 

3. Keiko wants to measure the distance from his house to school. It takes him fifteen minutes to get to school by car. Which unit would be BEST for measuring the distance from Keiko's house to school?

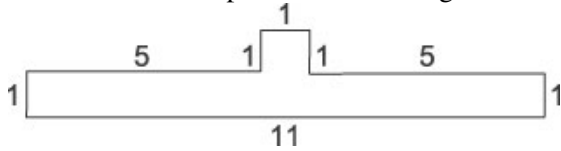
- A. centimeter
  - B. meter
  - C. kilometer
  - D. millimeter
-

4. Look at the grid below. What is the ordered pair at point M?



- A. (3, 4)  
 B. (3, 6)  
 C. (4, 5)  
 D. (5, 4)
- 

5. What is the perimeter of the figure below?

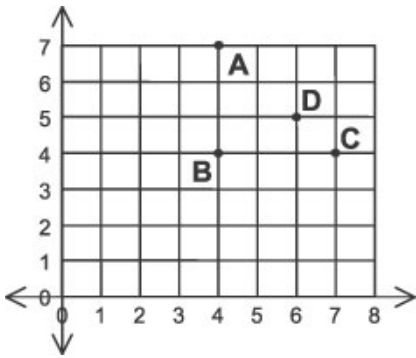


- A. 24 units  
 B. 24 sq. units  
 C. 26 units  
 D. 26 sq. units
- 

6. Paul bought a toy for \$0.45. He gave the clerk \$1.00. The clerk gave him two quarters and one other coin. What was the other coin?

- A. a quarter  
 B. a dime  
 C. a penny  
 D. a nickel
-

7. Which point is (7,4)?



- A. point A
- B. point B
- C. point C
- D. point D

8. Which describes these figures?

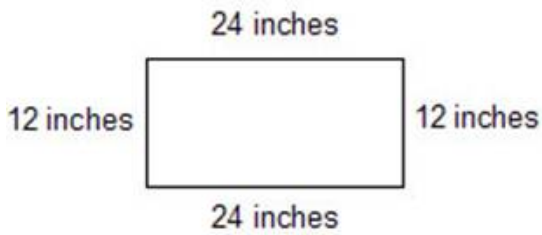


- A. all the same kind of shape
- B. all perpendicular
- C. all symmetrical
- D. all parallel

9. Which amount shows the value of seven dimes?

- A. \$0.07
- B. \$0.70
- C. \$7.00
- D. \$70.00

10. Find the perimeter of the box.



- A. 62 inches
  - B. 72 inches
  - C. 36 inches
  - D. 288 inches
- 

11. If the paper clip is 2 inches long, about how long is the pencil?

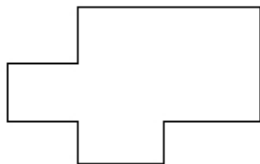


- A. 3 inches
  - B. 4 inches
  - C. 6 inches
  - D. 8 inches
- 

12. Louis wanted to buy a chicken sandwich for \$1.83. He has 3 quarters, 4 dimes, 1 nickel, and 2 pennies. How much more money does Louis need?

- A. 70 cents
  - B. 61 cents
  - C. 54 cents
  - D. 43 cents
- 

13. How many line segments are in the figure?



- A. 6
  - B. 8
  - C. 10
  - D. 12
-

14. What would the same time be on a digital clock?

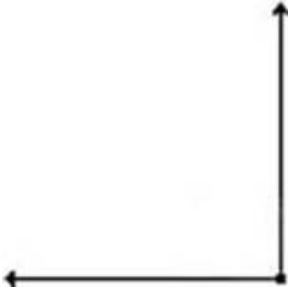


- A. 3:10
  - B. 3:50
  - C. 4:10
  - D. 4:50
- 

15. About how much does an apple weigh?

- A. 4 grams
  - B. 4 kilograms
  - C. 4 ounces
  - D. 4 pounds
- 

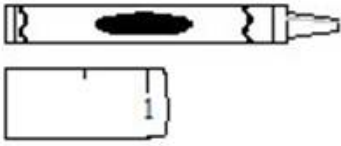
16. What figure is shown below?



- A. ray
  - B. line
  - C. angle
  - D. segment
-

17.

Look at the crayon below. Use the ruler to estimate the length of the crayon to the nearest inch.



About how long is the crayon?

- A. 1 inches
  - B. 2 inches
  - C. 3 inches
  - D. 4 inches
- 

18. Which unit is used to measure the height of a door?

- A. mile
  - B. kilometer
  - C. foot
  - D. millimeter
- 

19. Jamal just weighed his new puppy. Which of these could be the weight of the puppy?

- A. 12 days
  - B. 12 degrees
  - C. 12 feet
  - D. 12 pounds
- 

20. Which can be used to measure the length of a pencil?

- A. calendar
- B. clock
- C. ruler
- D. thermometer

**Answer Key**

1. C) 12
2. C) 7:50 A.M.
3. C) kilometer
4. B) (3, 6)
5. C) 26 units
6. D) a nickel
7. C) point C
8. A) all the same kind of shape
9. B) \$0.70
10. B) 72 inches
11. C) 6 inches
12. B) 61 cents
13. C) 10
14. B) 3:50
15. C) 4 ounces
16. C) angle
17. B) 2 inches
18. C) foot
19. D) 12 pounds
20. C) ruler